

SARDAR PATEL UNIVERSITYB.Com. Examination, 4th SemesterMonday, 17th April 2017

Session: Time: 10.00am to 12.00pm

Subject/ Course Title: Reasoning Ability-II UB04SCOM13**Total Marks: 60**

Important Note: In Q 1, Q2, Q3 and Q4 there is 1 to 15 Questions. Each question carries 1 Marks. There is no negative marking. Please select A or B or C or D and write it as a capital letter in your answer book. If you write, other than A or B or C or D will not be considered as a correct answer.

For 1 to 5: Choose the alternative which is closely resembles the mirror image of the given combination.

- 1) **TERMINATE**
 (1) TERMINET (2) ETAMINRET
 (3) ETAMINRET (4) ETAMINRET

A) 1 B) 2 C) 3 D) 4

- 2) **BRISK**
 (1) KIRB (2) KIRB
 (3) KIRB (4) KIRB

A) 1 B) 2 C) 3 D) 4

- 3) **INFORMATION**
 (1) INFORMATION (2) INFORMATION
 (3) INFORMATION (4) INFORMATION

A) 1 B) 2 C) 3 D) 4

- 4) **FIXING**
 (1) GNIXIF (2) FIXING
 (3) GNIXIF (4) GNIXIF

A) 1 B) 2 C) 3 D) 4

- 5) **WHITE**
 (1) EIHWW (2) EIHWW
 (3) EIHWW (4) EIHWW

A) 1 B) 2 C) 3 D) 4

For 6 to 10: Choose the alternative which is closely resembles the water-image of the given combination.

- 6) **96FSH52**
 (1) 96FSH52 (2) 96FSH52
 (3) 96FSH52 (4) 96FSH52

A) 1 B) 2 C) 3 D) 4

- 7) **U4P15B7**
 (1) U4P15B7 (2) U4P15B7
 (3) U4P15B7 (4) U4P15B7

A) 1 B) 2 C) 3 D) 4

- 8) **FAMILY**
 (1) FAMILY (2) FAMILY
 (3) FAMILY (4) FAMILY

A) 1 B) 2 C) 3 D) 4

- 9) **rise**
 (1) rise (2) rise
 (3) rise (4) rise

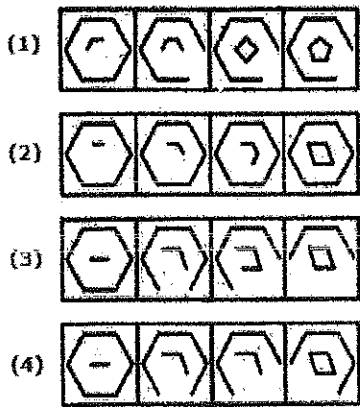
A) 1 B) 2 C) 3 D) 4

- 10) **US91Q4M5W3**
 (1) US91Q4M5W3 (2) US91Q4M5W3
 (3) US91Q4M5W3 (4) US91Q4M5W3

A) 1 B) 2 C) 3 D) 4

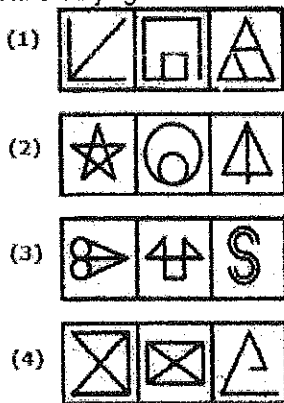
For 11 to 15: Choose the set of figures which follows the given rule.

- 11) **Rule: Closed figures losing their sides and open figures gaining their sides.**



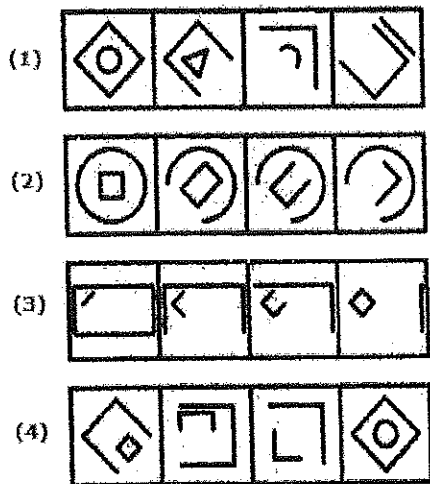
A) 1 B) 2 C) 3 D) 4

12) Rule: Any figure can be traced by a single unbroken line without retracting.



A) 1 B) 2 C) 3 D) 4

13) Rule: Closed figures gradually become open and open figures gradually become closed.



A) 1 B) 2 C) 3 D) 4

14) Rule: Closed figures become more and more open and open figures become more and more closed.



A) 1 B) 2 C) 3 D) 4

15) Rule: The series becomes complex as it proceeds.



A) 1 B) 2 C) 3 D) 4

For 1 to 7: Find the odd one out.

1) 331, 482, 551, 263, 383, 362, 284

A) 263 B) 383 C) 331 D) 551

2) 835, 734, 642, 751, 853, 981, 532

A) 751 B) 853 C) 981 D) 532

3) 41, 43, 47, 53, 61, 71, 73, 81

A) 61 B) 71 C) 73 D) 81

- 4) 3, 5, 7, 12, 17, 19
A) 19 B) 17 C) 5 D) 12
- 5) 10, 14, 16, 18, 21, 24, 26
A) 26 B) 24 C) 21 D) 18
- 6) 1, 4, 9, 16, 20, 36, 49
A) 1 B) 9 C) 20 D) 49
- 7) 1, 4, 9, 16, 23, 25, 36
A) 9 B) 23 C) 25 D) 36
- 8) The average of 20 numbers is zero. Of them, at the most, how many may be greater than zero?
A) 0 B) 1 C) 10 D) 19
- 9) The average weight of 8 persons' increases by 2.5 kg when a new person comes in place of one of them weighing 65 kg. What might be the weight of the new person?
A) 76KG B) 76.5KG C) 85KG D) 85.5KG
- 10) A library has an average of 510 visitors on Sundays and 240 on other days. The average number of visitors per day in a month of 30 days beginning with a Sunday is:
A) 250 B) 276 C) 280 D) 285
- 11) A pupil's marks were wrongly entered as 83 instead of 63. Due to that the average marks for the class got increased by half ($\frac{1}{2}$). The number of pupils in the class is:
A) 40 B) 20 C) 10 D) 73
- 12) Today is Monday. After 61 days, it will be
A) Wednesday
B) Saturday
C) Tuesday
D) Thursday
- 13) The calendar for the year 2007 will be the same for the year:
A) 2014
B) 2016
C) 2017
D) 2018

14) January 1, 2007 was Monday. What day of the week lies on Jan. 1, 2008?

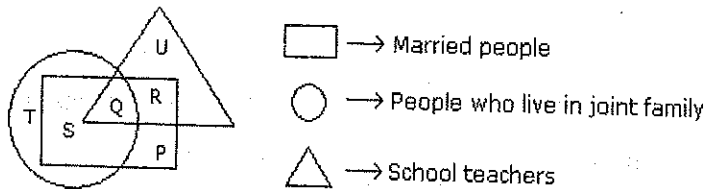
- A) Tuesday
- B) Monday
- C) Wednesday
- D) Sunday

15) On what dates of April, 2001 did Wednesday fall?

- A) 1st, 8th, 15th, 22nd, 29th
- B) 2nd, 9th, 16th, 23rd, 30th
- C) 4th, 11th, 18th, 25th
- D) 3rd, 10th, 17th, 24th

Q3

For 1 to 3: Study the following figure and answer the questions given below.



1) By which letter, the married teachers who live in joint family are represented?

- A) R
- B) Q
- C) S
- D) P

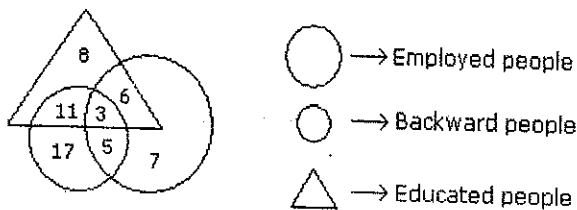
2) By which letter, the married people who live in joint family but not are school teachers are represented?

- A) R
- B) U
- C) S
- D) P

3) By which letter, the people who live in joint family but are neither married nor teachers are represented?

- A) T
- B) R
- C) Q
- D) S

For 4 to 7: Study the following figure and answer the questions given below.



4) How many educated people are employed ?

- A) 9
- B) 18
- C) 20
- D) 15

5) How many backward people are educated ?

- A) 9
- B) 14
- C) 28
- D) 6

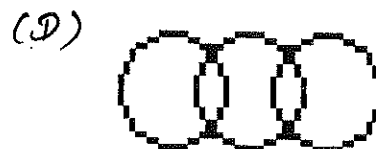
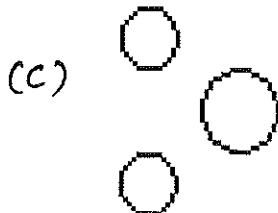
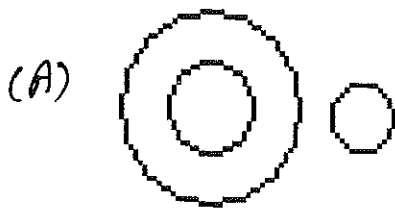
6) How many backward uneducated people are employed ?

- A) 14
- B) 7
- C) 5
- D) 11

7) How many backward people are not educated?

- A) 3
- B) 1
- C) 25
- D) 22

For 8 to 15: Which of the following diagrams indicates the best relation between the question 8 to 15? Select the A or B or C or D for this relationship.



8) Judge, Thieves and Criminals

- A) A
- B) B
- C) C
- D) D

9) India, Gujarat and World

- A) A
- B) B
- C) C
- D) D

10) Hockey, Football and Cricket

- A) A
- B) B
- C) C
- D) D

11) Sardar Patel University, Symbios International University, Jawaharlal Nehru University

- A) A
- B) B
- C) C
- D) D

12) Teacher, Writer and Musician

- A) A
- B) B
- C) C
- D) D

13) Narendra Modi, Pranab Mukherjee, Nitish Kumar

- A) A
- B) B
- C) C
- D) D

14) Class, Institute, University

- A) A
- B) B
- C) C
- D) D

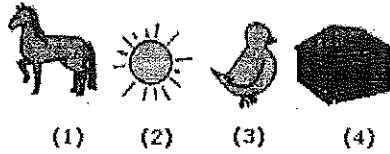

15) Vegetables, Mango and Fruits

- A) A
- B) B
- C) C
- D) D

94



For 1 to 5: Watch the following picture and give the answer:

1)





- A) 1
B) 2
C) 3
D) 4

2)



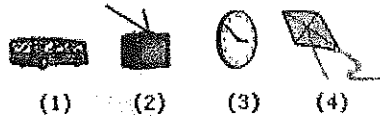

- A) 1
B) 2
C) 3
D) 4

3)



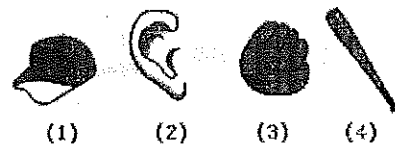

- A) 1
B) 2
C) 3
D) 4

4)



- A) 1
- B) 2
- C) 3
- D) 4

5)



- A) 1
- B) 2
- C) 3
- D) 4

- 6) Cup is to coffee as bowl is to
- A) Soup
 - B) Dish
 - C) Spoon
 - D) Food

- 7) Yard is to inch as quart is to
- A) Gallon
 - B) Ounce
 - C) Milk
 - D) Liquid

- 8) Play is to actor as concert is to
- A) Symphony
 - B) Piano
 - C) Musician
 - D) Percussion

- 9) Sponge is to porous as rubber is to
A) Massive
B) Solid
C) Inflexible
D) Elastic

- 10) Exercise is to gym as eating is to
A) Food
B) Dieting
C) Fitness
D) Restaurant

For 11 to 15: Choose the pair that best represents a similar relationship to the one expressed in the original pair of words.

- 11) RAIN : DRIZZLE
A) Run : Jog
B) Walk : Run
C) Hop : Shuffle
D) Swim : Dive

- 12) DIVISION : SECTION
A) Tether : Bundle
B) Layer : Tier
C) Chapter : Verse
D) Riser : Stage

- 13) FERAL : TAME
A) Rancid : Rational
B) Repetitive : Recurrent
C) Ephemeral : Immortal
D) Repentant : Honorable

- 14) INTEREST : OBSESSION
A) Mood : Feeling
B) Weeping : Sadness
C) Highlight : Indication
D) Dream : Fantasy

- 15) PSYCHOLOGIST : NEUROSIS
A) Dermatologist : Fracture
B) Rash : Orthopedist
C) Oncologist : Measles
D) Ophthalmologist : Cataract

Best of Luck...