

SARDAR PATEL UNIVERSITY
B. Com. (IV Semester) Examination
Tuesday, 19th April 2016
10:30 am to 12:30 pm
UB04SCOM13 – REASONING ABILITY-II

Total Marks : 60

Important Note :

In Q.1-Q2-Q3 and Q4 there are 1 to 15 Questions.

Each Question carries 1 marks. There are no negative marking. Please select A or B or C or D and write it as a capital letter in your answer sheet. If you write other than A or B or C or D will not be considered as a correct answer.

Q.1 **For 1 to 5:** Choose the alternative which is closely resembles the water Image of the given combination.

1) US91Q4M5W3

- (1) US91Q4M5W3 (2) US91Q4M5W3
 (3) US91Q4M5W3 (4) US91Q4M5W3

A) 1 B) 2 C) 3 D) 4

2) PQ8AF5BZ9

- (1) PQ8AF5BZ9 (2) PQ8AF5BZ9
 (3) PQ8AF5BZ9 (4) PQ8AF5BZ9

A) 1 B) 2 C) 3 D) 4

3) wrote

- (1) wrote (2) wrote
 (3) wrote (4) wrote

A) 1 B) 2 C) 3 D) 4

4) N41QJ3

- (1) N41QJ3 (2) N41QJ3
 (3) N41QJ3 (4) N41QJ3

A) 1 B) 2 C) 3 D) 4

5) D6Z7F4

- (1) D6Z7F4 (2) D6Z7F4
 (3) D6Z7F4 (4) D6Z7F4

A) 1 B) 2 C) 3 D) 4

For 6 to 10: Choose the alternative which is closely resembles the Mirror Image of the given combination.

6) qutubgarh

- (1) qutubgarh (2) qutubgarh
 (3) qutubgarh (4) qutubgarh

A) 1 B) 2 C) 3 D) 4

7) JUDGEMENT

- (1) JUDGEMENT (2) JUDGEMENT
 (3) JUDGEMENT (4) JUDGEMENT

A) 1 B) 2 C) 3 D) 4

8) REASONING

- (1) REASONING (2) REASONING
(3) REASONING (4) REASONING

A) 1 B) 2 C) 3 D) 4

9) QUALITY

- (1) QUALITY (2) QUALITY
(3) QUALITY (4) QUALITY

A) 1 B) 2 C) 3 D) 4

10) NUMBER

- (1) NUMBER (2) NUMBER
(3) NUMBER (4) NUMBER

A) 1 B) 2 C) 3 D) 4

For 11 to 15 Choose the word which is different from the rest.

11) 1) Chicken 2) Snake 3) Swan 4) Crocodile

A) 1 B) 2 C) 3 D) 4

12) 1) Cap 2) Turban 3) Helmet 4) Veil

A) 1 B) 2 C) 3 D) 4

13) 1) Kiwi 2) Eagle 3) Emu 4) Ostrich

A) 1 B) 2 C) 3 D) 4

14) 1) Rigveda 2) Yajurveda 3) Atharvaveda 4) Ayurveda

A) 1 B) 2 C) 3 D) 4

15) 1) Curd 2) Butter 3) Oil 4) Cheese

A) 1 B) 2 C) 3 D) 4

Q2 Give the answer 1 to 15

- 1) It was Sunday on Jan 1, 2006. What was the day of the week Jan 1, 2010?

A. Sunday	B. Saturday
C. Friday	D. Wednesday
- 2) What was the day of the week on 28th May, 2006?

A. Thursday	B. Friday
C. Saturday	D. Sunday
- 3) What was the day of the week on 17th June, 1998?

A. Monday	B. Tuesday
C. Wednesday	D. Thursday
- 4) What will be the day of the week 15th August, 2010?

A. Sunday	B. Monday
C. Tuesday	D. Friday
- 5) If 6th March, 2005 is Monday, what was the day of the week on 6th March, 2004?

A. Sunday	B. Saturday
C. Tuesday	D. Wednesday
- 6) The last day of a century cannot be

A. Monday	B. Wednesday
C. Tuesday	D. Friday
- 7) The calendar for the year 2007 will be the same for the year:

A. 2014	B. 2016
C. 2017	D. 2018

8 to 15 Find the odd Man out:

Page 4

8) 3, 5, 11, 14, 17, 21

A. 21

C. 14

B. 17

D. 3

9) 8, 27, 64, 100, 125, 216, 343

A. 27

C. 125

B. 100

D. 343

10) 10, 25, 45, 54, 60, 75, 80

A. 10

C. 54

B. 45

D. 75

11) 396, 462, 572, 427, 671, 264

A. 396

C. 671

B. 427

D. 264

12) 6, 9, 15, 21, 24, 28, 30

A. 28

C. 24

B. 21

D. 30

13) 1, 4, 9, 16, 23, 25, 36

A. 9

C. 25

B. 23

D. 36

14) 1, 4, 9, 16, 20, 36, 49

A. 1

C. 20

B. 9

D. 49

15) 2, 5, 10, 17, 26, 37, 50, 64

A. 50

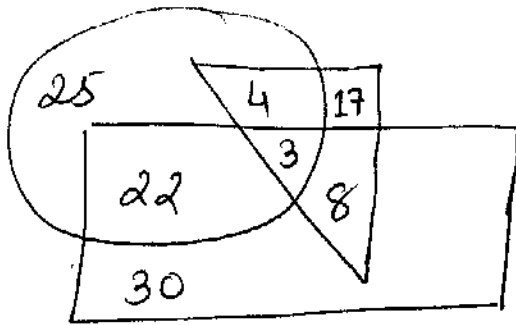
C. 37

B. 26

D. 64

Q.3 For 1 to 5

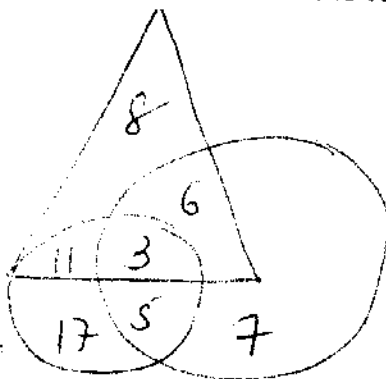
Study the following figure and answer the questions given below.



□ → Musicians
 ○ → Students
 ▽ → Lawyers

- How many lawyers are neither musicians nor students ?
 A) 17 B) 5 C) 10 D) 30
- How many lawyers are both students and musicians ?
 A) 22 B) 8 C) 3 D) 30
- How many musicians are students ?
 A) 5 B) 8 C) 25 D) 16
- How many students are neither musicians nor lawyers ?
 A) 25 B) 17 C) 5 D) 10
- How many musicians are neither students nor lawyers ?
 A) 10 B) 17 C) 30 D) 15

For 6 to 9 : Read the following figure and give answer.



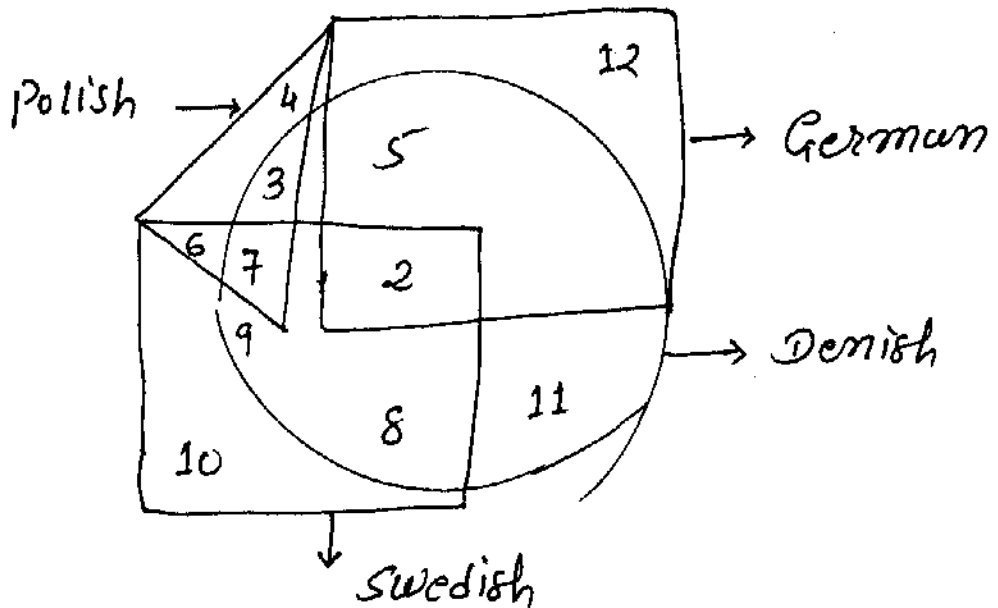
○ — Business Persons

○ — Backward Persons

△ — Educated Persons

- How many educated persons do the business ?
 A) 9 B) 18 C) 20 D) 15
- How many backward persons are educated ?
 A) 9 B) 28 C) 14 D) 6
- How many uneducated backward persons do the business ?
 A) 14 B) 5 C) 7 D) 11
- How many backward persons are not educated ?
 A) 3 B) 14 C) 22 D) 25

For 10 to 15 : Read the following figure and give the answer



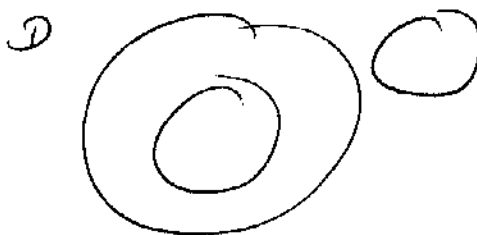
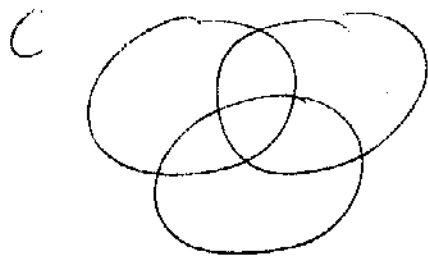


- 10) How many persons can speak German and Danish both the languages only ?
A) 5 B) 7 C) 8 D) 18
- 11) How many persons can speak Polish and Swedish both ?
A) 10 B) 13 C) 11 D) None of these
- 12) How many persons can speak only German ?
A) 7 B) 9 C) 12 D) 19
- 13) How many persons can speak German, Danish and Swedish ?
A) 8 B) 7 C) 2 D) None of these
- 14) How many persons can speak all the languages ?
A) 1 B) 2 C) 8 D) None
- 15) How many persons can speak Polish-Danish and Norwegian ?
A) 15 B) 11 C) 4 D) None

Q.4 Give the answer 1 to 15

- 1) PCWL : REXM :: THNY : ?
A) VJOZ B) KOVZ C) OZPC D) PQRN
- 2) ADE : FGJ :: KNO : ?
A) TPR B) RQP C) PQT D) PRS
- 3) U... O ... ? ... E A
A) U B) O C) A D) I
- 4) Exam : Question Paper :: Interview : ?
A) Questions B) Talk C) Problem D) Query
- 5) Birthday : Cake :: New Year : ?
A) Firework B) Sweets C) New Cloths D) 1st January
- 6) 36 : 49 :: ? : 81
A) 100 B) 62 C) 68 D) 64

- 7) Tea : ? :: Milk : Coffee
 A) Water B) Milk C) Sugar D) Tea
- 8) Tailor : Suit :: ?
 A) Scheme : Agent B) Edit : Manuscript
 C) Revise : Writer D) Mention : Opinion
- 9) Division : Section :: ?
 A) Layer : Tier B) Tether : Bundle
 C) Chapter : Verse D) Riser : Stage

For 10 to 15 Identify the following diagrams for indicates the best relation :



- 10) Teacher, Graduate, Sportsman
 A) A B) B C) C D) D
- 11) Girl, Wrestler, Singer
 A) A B) B C) C D) D
- 12) Table, Chair, Furniture
 A) A B) B C) C D) D
- 13) Member, Country, City
 A) A B) B C) C D) D
- 14) Window, Room, Wall
 A) A B) B C) C D) D
- 15) Grain, Crop, Rice
 A) A B) B C) C D) D

@ @ @